

Kleur een breuk – 3.

Kommagetel.

1x kleur een breuk – 3a met breuken $\frac{1}{2}$. $\frac{1}{3}$. $\frac{1}{4}$

1x kleur een breuk – 3b met breuken $\frac{1}{2}$. $\frac{1}{3}$. $\frac{1}{4}$. $\frac{1}{5}$. $\frac{1}{8}$



vanjufmarjan.nl

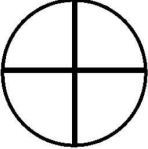









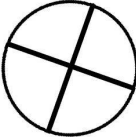

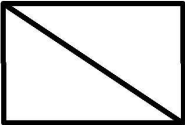






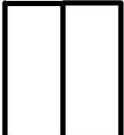

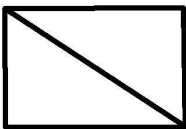
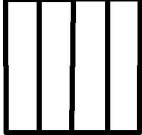





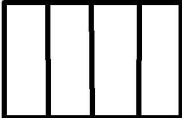
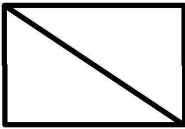

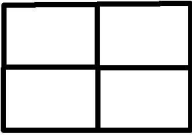

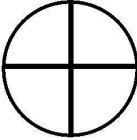

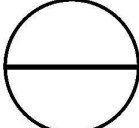






Naam : _____

www.vanjufmarjan.nl

Dobbel en kleur een breuk - 3a

Uitleg : Dobbel met een dobbelsteen en kleur een breuk die in de lijn verticaal staat. Dobbel door tot alle breuken zijn ingekleurd.

Copyright 2020

0,25 	0,75 	0,50 	1,00 	0,50 	0,50 
0,50 	0,50 	0,66 	0,33 	0,25 	0,75 
1,00 	0,25 	0,75 	0,66 	0,50 	0,33 
0,50 	0,50 	0,75 	1,00 	0,25 	1,00 
0,50 	0,25 	0,50 	0,33 	0,25 	0,50 
0,50 	1,00 	0,66 	0,75 	0,75 	0,50 
					



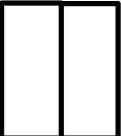
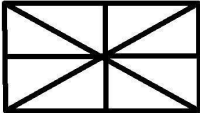
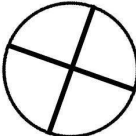


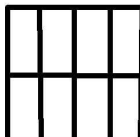




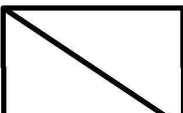

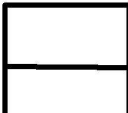




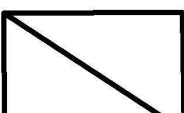


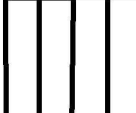



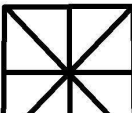








Naam : _____

www.vanjufmarjan.nl

Dobbel en kleur een breuk - 3b

Uitleg : Dobbel met een dobbelsteen en kleur een breuk die in de lijn verticaal staat. Dobbel door tot alle breuken zijn ingekleurd.

Copyright 2020

0,75 	0,20 	0,50 	1,00 	0,25 	0,50 
0,875 	0,50 	0,66 	0,33 	0,50 	0,75 
1,00 	0,25 	0,50 	0,66 	0,75 	0,50 
33 % 	1,00 	0,625 	0,40 	0,25 	1,00 
0,50 	0,75 	0,375 	0,75 	0,125 	0,25 
0,60 	0,75 	0,66 	0,33 	1,00 	0,80 